

ONLINE WITH COMPUTERS





Assessment Sheets

Class 1

Name: _____

Unit 1


Date: _____

Total Marks: 30

Obtained Marks: _____

A. Select the best option.

10

- Machines are _____ made thing.
(a) God (b) Man
- Natural things are made by :
(a) Man (b) Nature
- A _____ is an electronic machine.
(a) cat (b) computer (c) can
- A _____ keeps your food and water cool.
(a) washing machine (b) train (c) refrigerator
-  is a picture of a _____.
(a) calculator (b) mobile phone (c) car

B. Fill in the blanks.

5

natural

games

music

man-made

sums

- We can solve _____ on a computer.
- Machines are _____ things.
- We can play _____ on a computer.
- We can listen to _____ on a computer.
- Sun, moon, stars are _____ things.



C. Tick (✓) mark the ones which are machines.

___ /5



D. Answer these questions.

8

1. Name four types of computer.

a. _____

b. _____

c. _____

d. _____

2. Define a computer.

a. _____

b. _____

3. Define machines.

a. _____

b. _____

4. Name four machines you can see at your home.

a. _____

b. _____

E. Draw a computer here.

2



Assessment Sheets

Class 1

Name: _____

Unit 2

Date: _____

Total Marks: 30

Obtained Marks: _____

A. Select the best option.

10

- _____ is used to see pictures, alphabets, and numbers.
(a) mouse (b) monitor (c) speaker
- _____ looks like a television screen.
(a) monitor (b) CPU (c) mouse
- A keyboard has small buttons called _____.
(a) keys (b) kites (c) clips
- A _____ is used to point things on a computer.
(a) mouse (b) monitor (c) printer
- We should _____ our shoes when we enter the computer lab.
(a) put on (b) put off (c) take off

B. Tick (✓) the correct and cross (✗) the wrong ones.

5

- A keyboard looks like a TV screen.
- Mouse is the brain of a computer.
- Mouse helps to draw to draw pictures.
- Keyboard helps to type numbers.
- A computer has three main parts.

C. Look at the pictures carefully. Identify the missing part in each picture. Write the name of the missing part in the space provided.

5



D. Answer the following questions.

10

1. Name the four parts of a computer.

- (a) _____
- (b) _____
- (c) _____
- (d) _____



2. Which part of a computer looks like a TV?



3. Which part of a computer helps you type?



4. Which part of a computer helps point things on the monitor?





Assessment Sheets

Class 1

Name: _____

Unit 3

Date: _____

Total Marks: 30

Obtained Marks: _____

A. Fill in the blanks spaces.

10

1. The _____ keys are used for typing words.
2. The _____ keys are used for typing numbers.
3. There are _____ alphabet keys.
4. The _____ key is used to move to the next line.
5. The _____ is the longest key on the keyboard.

B. Tick (✓) the correct and cross (✗) the wrong ones.

5

1. The Enter key is the longest key.
2. The Spacebar key is used to insert blank space.
3. The Backspace key is used to erase the previous letter.
4. The Caps Lock key is used to write small letter.
5. The Keyboard does not help you to type.

C. Rearrange the jumbled words.

5

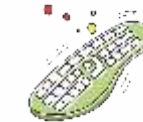
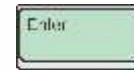
1. UMNEBR

2. NEERT

3. EKYBAODR

4. LAPHBAET

5. APSCEABR



D. Answer the following questions.

10

1. If you want to write your age, which type of keys will you use?

2. Which key is used to move to the next line?

3. Which part of computer helps you to type?

4. If you want to write your name in **capital** letters, which key will you use?

5. Which key is used to insert **blank space** between two words?



Assessment Sheets

Class 1

Name: _____

Unit 4

Date: _____

Total Marks: 30

Obtained Marks: _____

A. Tick (✓) the correct ones and cross (✗) the wrong ones.

5

1. When you press a mouse button you hear a click sound.
2. The mouse helps to point things on a computer.
3. The mouse pad should not be used.
4. A mouse has five buttons.
5. The mouse pad helps to keep the dust away.

B. Circle the picture that shows the correct way of holding a mouse.



5

C. Fill in the blanks with missing letter.

5

1. The arrow on the computer monitor is called m ____ us ____ p ____
i ____ t ____ r.
2. Pressing on the left mouse button is called l ____ f ____ c ____ l ____ k.
3. The mouse has two b ____ t ____ o ____ s.
4. The mouse is kept on a m ____ u ____ e p ____ d.
5. When the left button of the mouse is pressed twice, it is called a
d ____ ouble c ____ ck.

D. Answer the following questions.

5

1. How many buttons are there on a mouse?



2. What is a mouse pointer?



E. Demonstrate left and right click.

10



Assessment Sheets

Class 1

Name: _____

Unit 5

Date: _____

Total Marks: 30

Obtained Marks: _____

A. Look at the pictures carefully. Observe the activities and match them with their names.

5



◀ Solving Maths Sums



◀ Drawing and colouring



◀ Listening to Music



◀ Playing Games



◀ Watching Cartoons

B. Arrange the jumbled words.

5

4. UMISC

--	--	--	--	--	--

5. ELANR

--	--	--	--	--	--

2. CRAOOTN

--	--	--	--	--	--	--	--

1. DERA

--	--	--	--

3. AYLP

--	--	--	--



C. Choose the correct choice and write in the space provided.

10

1. A place having aeroplanes is called an _____.

- (a) airjacket (b) aircraft (c) airport

2. You can write _____ to your friends.

- (a) letters (b) litter (c) later

3. A computer is used in a _____.

- (a) bank (b) tank (c) rank

4. You can read and _____ on a computer.

- (a) right (b) write (c) white

5. You can play _____ on a computer.

- (a) songs (b) hide and seek (c) badminton

D. Answer the following questions.

10

1. Write the names of any three places where a computer is used.

2. Write the names of two of your favourite games.

a. _____ b. _____

3. Write the names of two of your favourite cartoons.

a. _____ b. _____

4. Name the place where money is kept safe.

5. Name four things that a computer helps to do.

a. _____

b. _____

c. _____

d. _____



Assessment Sheets

Class 1

Name: _____

Unit 6

Date: _____

Total Marks: 30

Obtained Marks: _____

A. Fill in the blanks.

5

1. A program you use on the computer is called _____.
2. Paint 3D is made by _____.
3. Paint 3D is a fun app on the computer where you can draw and _____.
4. The blank space to draw is called _____.
5. Paint 3D is like a _____.

B. Answer these questions.

10

1. What is Paint 3D?

2. What is a Canvas?

C. Let students demonstrate their skills about paint 3D in a practical way.

15



Assessment Sheets

Class 1

Name: _____

Unit 7

Date: _____

Total Marks: 30

Obtained Marks: _____

A. Match these:

5

Coding ▶

◀ Giving steps to a computer

App ▶

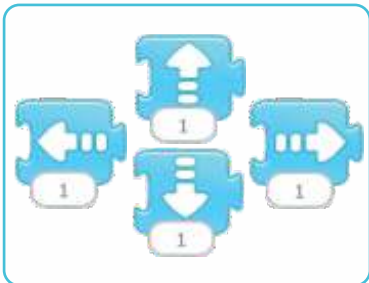
◀ Where the story happens

Stage ▶

◀ A program on your computer or tablet

B. Name these blocks

10



C. Answer these questions:

10

1. What is coding?

2. What is an app?

C. Let students demonstrate their learning about Scratch Jr.

5



Assessment Sheets

Class 1

Name: _____

Unit 8

Date: _____

Total Marks: 30

Obtained Marks: _____

A. Match the robot names with the correct pictures.

5

Surgery Robot



Factory Robot Arm



B. Match the robot body parts with their work.

10

Part

Head/Camera



Arms/Grippers



Wheels/Legs



Computer Chip



Battery



What it Does

Help the robot move

The robot's brain

Helps the robot 'see'

Gives power to the robot

Pick things up

C. Circle the right answer.

8

1. What helps a robot see?

a) Nose

b) Camera

c) Button

2. What is a robot's brain?

a) Hat

b) Computer Chip

c) Tail

3. What do robots use to move?

a) Wings

b) Wheels/Legs

c) Magic

4. What do robots need to work properly?

a) Ice cream

b) Instructions

c) Sand

D. Tick (✓) the correct and cross (✗) the wrong ones.

4

- Robots can think.
- Robots can dance.
- Robots don't need instructions.
- Some robots help farmers.

E. Ask students to name 3 robots orally.

3

C. Say yes or no.

1. AI does not have feelings.
2. AI cannot work faster than humans.
3. AI can make mistakes.
4. AI helps us to make decisions.
5. AI needs proper care.

14th Executive Floor, Pace Tower,
M.M. Alam Extension, Gulberg II, Lahore.

